

Name: \_\_\_\_\_

# Morning Math

Write the date.





\_\_\_\_\_ , \_\_\_\_\_ , \_\_\_\_\_  
-----  
\_\_\_\_\_ , \_\_\_\_\_ , \_\_\_\_\_

Determine the missing numbers.

$37 + 55 = \square$	$12 + 69 = \square$	$\square = 44 - 25$
---------------------	---------------------	---------------------

Color in two different ways to show the amount.

Write <, > or = in the jar to compare.

544  455	403  304
882  882	204  370

Show the time.

It is four thirty five.

Solve the problem.

There were 36 geese at the park when some more came. If there are now 67 geese at the park, how many came?

\_\_\_\_\_